



Lapwing Class Home Learning 18th May 2024

Essential Skills

- Reading
- Times Tables
- Spellings

Reading

Please continue to read at home this week. We are aiming for a goal of having everyone in Lapwing reading at least 5 times each week!

Library books can be exchanged when read, although is not expected that a child will finish reading their library book every week, particularly if they have chosen a challenging or longer text.

Reading at home should be recorded in reading records, which can be brought into school everyday as children will read throughout the week and will need to record it in their reading records.

I have attached some reading comprehension style questions for you to have a go at if you would like.

Times Tables

Please practice Times table rockstars this week. Children should have a gig to complete this week.

In class we will be practicing our times tables regularly but the more the children practice their times tables the more confident they will become.

If you do not have access to TTRS please let me know and I can provide log in details or alternative options.

Spellings


Please find below (and on Spelling Shed), this week's spellings to practise at home. There will be a short test of these spellings next Thursday. I have differentiated spellings so some children will have different spellings than others so to find out which set of spellings your child should be practicing please look on Spelling Shed.

Please encourage your children to practice their spellings every day.

This weeks spelling words are:

Main Spellings:

Differentiated spellings:

Spelling Shed 
Words ending '-tial'

torrential

impartial

essential

circumstantial

substantial

potential

residential

influential

preferential

confidential

Spelling Shed 
Words with the digraph 'ei' and tetragraph 'eigh'

vein

sleigh

reins

freight

eight

eighteen



reign

weigh

veil

neighbour

Added Extras

1)	$7 + (8 \times 6)$	
2)	$\frac{2}{5} - \frac{1}{10}$	
3)	Write 0.7 as a fraction	
4)	$\frac{2}{5}$ of 21 = ___ - 10	
5)	Round 4.639 to 1dp	
6)	What is the range of: 21, 35, 17, 27, 32, 12 and 30	
7)	Find $\frac{2}{3}$ of 36	
8)	Which of these numbers is prime ? 33 45 57 69 53 49	
9)	What is the difference between 6000 and 60?	
10)	Which two measurements add up to 3 feet? 14 inches 2 feet 1 inch 1 foot 7 inches 11 inches	
11)	How many months in $\frac{3}{4}$ of a year?	
12)	Fill in the missing operations (+, -, x or \div) to make this correct: $5 \square 6 \square 3 \square 2 = 8$	
13)	A rectangular swimming pool measures 6 meters by 4 meters. What is the area ?	
14)	What 3d shape does this net make? 	
15)	What is the missing angle? 	
16)	Two numbers have a sum of 15 and a product of 26. What are they?	
17)	I eat a third of a box of chocolates. There are now 16 left. How much were in the box at the start?	
18)	If $2x + 1 = 7$ what is the value of x ?	





You need to a bit of a detective this week to find missing numbers, work out the properties of shapes and deal with negative numbers.

SET 3	
1. What number is halfway between 46 and 52 ?	
2. What number is missing in this sequence: 8, 12, 16, ?? , 24	
3. A number is bigger than 804 and smaller than 810. What could the number be?	
4. Which is the smallest of these numbers: 34, 56, 78, 24, 45 ?	
5. How many sides does a hexagon have?	
6. Which shape has five sides?	
7. What is 654 to the nearest 10 ?	
8. Which number comes between -3 and -5 ?	
9. Write down a number in the six times table bigger than 20 and smaller than 28.	
10. Write down a number between twenty and thirty that is divisible by 4 and by 6.	

CORRECT THE SENTENCES

1. *Read each sentence carefully.*

2. *Re-write the sentences by correcting the underlined spelling word.*

1. We work hard at skool every day to make sure we grow our brains.

2. Ben stoud proudly on the podium and received his gold medal.

3. The little boy was stubborn and he always refused to eat vegetables.

4. Jasmin watched the pasta bubbleing away on the stove stop.

5. The dog's tail was happily waging as he played in the green grass.

6. We were beging our parents to let us go to Disney Land.

7. The iglew started to melt as the hot summer sun began to come out from behind the clouds.

8. My dog is very norty and he always bites people who come near him.

Punctuation are marks we use in writing to help us make the meaning clear. Every sentence must end with a **period**, **exclamation point** or **question mark**. Other punctuation includes **commas**, **quotation marks** and **apostrophes**.

'	apostrophe	used to show possession or in a contraction	The man's dog ran outside.
'	apostrophe	used in a contraction	didn't can't

Singular possessive nouns are formed by adding an apostrophe and then an S. Mark's teacher Diego's ball

Plural nouns are usually made possessive by adding an apostrophe after the S. When a plural noun does not end with an S, an apostrophe and then an S are added.

the teacher's chair the men's room

Rewrite the following sentences using apostrophes.

1. Marys cat ran across our street.

2. I shouldnt buy that dress today.

3. The cows hay got wet in the rain.

4. Theyre going to the store after we finish dinner.
